
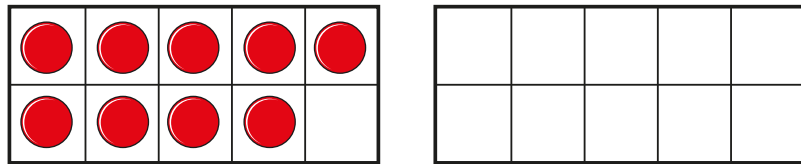


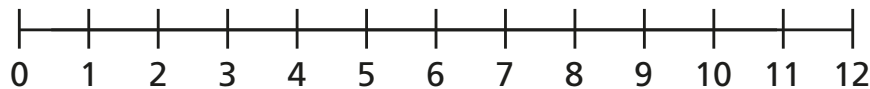
- 1 There are 9 children on the bus.  
5 more children get on the bus.



How many children are on the bus now?

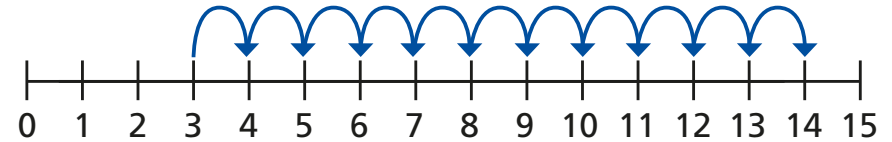


- 2 Eva has 4 coins.  
Jack gives her 7 more coins.  
How many coins does Eva have now?

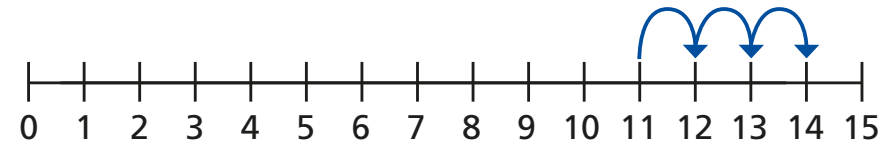


- 3 Ron and Mo are working out  $3 + 11$  on a number line.

Ron's method

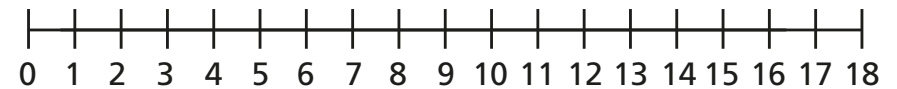


Mo's method



What is the same and what is different?

Use a number line to work out the additions.



a)  $2 + 13$

b)  $4 + 9$

c)  $1 + 17$