



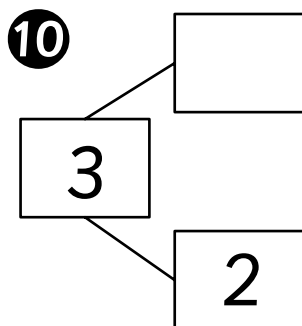
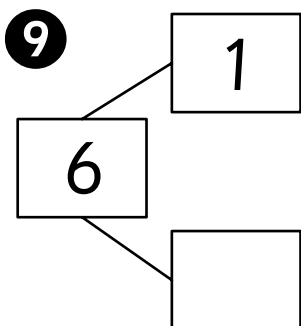
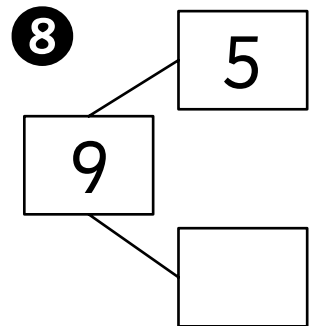
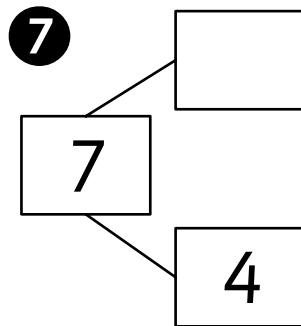
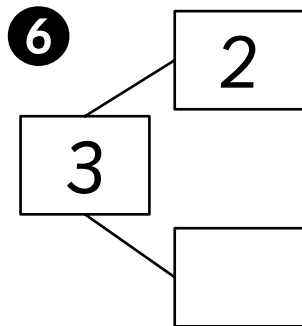
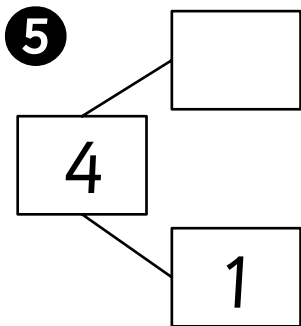
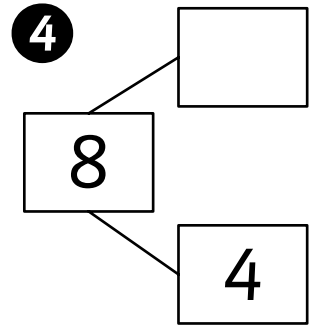
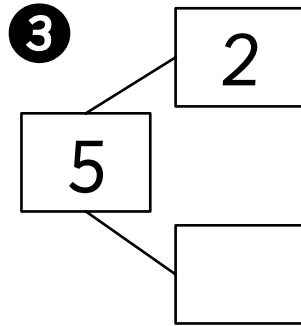
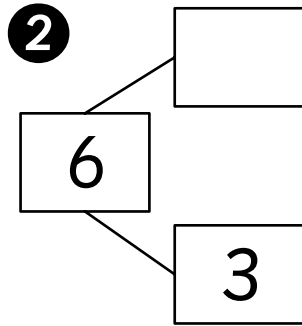
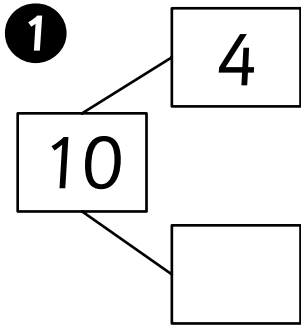
Addition Impossible

Activity Sheet



Name: _____ Class: _____

Complete the number bonds.



Fill in the missing numbers.

11 $7 = 3 + \underline{\hspace{2cm}}$

12 $4 + \underline{\hspace{2cm}} = 6$

13 $1 + 1 = \underline{\hspace{2cm}}$

14 $7 + \underline{\hspace{2cm}} = 10$

15 $\underline{\hspace{2cm}} + 2 = 6$

16 $8 = 6 + \underline{\hspace{2cm}}$

17 $5 + 3 = \underline{\hspace{2cm}}$

18 $4 = \underline{\hspace{2cm}} + 3$

19 $8 = 1 + \underline{\hspace{2cm}}$

20 $3 + \underline{\hspace{2cm}} = 9$